

Lecture 9 CH102 A1 (MWF 9:05 am) Spring 2017 Copyright © 2017 Dan Dill dan@bu.edu

[TP] Which is the correct order of **decreasing intermolecular forces**?

20% 1. HI > HBr > HCl
 20% 2. HCl > HBr > HI
 20% 3. NH₃ > H₂O > CO
 20% 4. NH₃ > CO > HCl
 20% 5. None of the above

BOSTON UNIVERSITY

Response Counter 10 1

Lecture 9 CH102 A1 (MWF 9:05 am)
 Wednesday, February 8, 2017

- Review: Effect of molecular attraction
- Real gases: Effect of molecular size
- Real gases: van der Waals equation
- Phase diagrams

Next: Complete ch11: Phase diagrams; begin ch12: Solutions and their behavior.

Triple point YouTube video: <http://goo.gl/4K1SR>
 Critical point YouTube video: <http://goo.gl/xo2jU>

BOSTON UNIVERSITY

Lecture 9 CH102 A1 (MWF 9:05 am) Spring 2017 Copyright © 2017 Dan Dill dan@bu.edu

Contributions to van der Waals *a*

Van der Waals *a* reflects intermolecular attractions present when gas particles **encounter one another**.

Therefore, hydrogen bonding can make a contribution.

BOSTON UNIVERSITY

6

Lecture 9 CH102 A1 (MWF 9:05 am) Spring 2017 Copyright © 2017 Dan Dill dan@bu.edu

[TP] Which is the correct order of **decreasing intermolecular forces**?

20% 1. HI > HBr > HCl
 20% 2. HCl > HBr > HI
 20% 3. NH₃ > H₂O > CO
 20% 4. NH₃ > CO > HCl
 20% 5. None of the above

BOSTON UNIVERSITY

Response Counter 10 7

Lecture 9 CH102 A1 (MWF 9:05 am) Spring 2017

Copyright © 2017 Dan Dill dan@bu.edu

[Quiz] Which of the following is the correct order of species for **increasing** value of **van der Waals b** ?

- 25% 1. $O_2 < Br_2 < CO_2 < He$
 25% 2. $O_2 < CO_2 < He < Br_2$
 25% 3. $He < O_2 < Br_2 < CO_2$
 25% 4. $He < O_2 < CO_2 < Br_2$



Response Counter

10 14

Lecture 9 CH102 A1 (MWF 9:05 am) Spring 2017

Copyright © 2017 Dan Dill dan@bu.edu

A gas law for “real” gases

We know the ideal gas law $pV = nRT$ where ...

$$p = p_{\text{empty}} = p_{\text{observed}} + a(n/V_{\text{container}})^2$$

$$V = V_{\text{empty}} = V_{\text{container}} - b n$$

Combine. these two expressions into an equation relating p_{observed} , $V_{\text{container}}$, and T .



15

Lecture 9 CH102 A1 (MWF 9:05 am) Spring 2017

Copyright © 2017 Dan Dill dan@bu.edu

A gas law for “real” gases

We know the ideal gas law $pV = nRT$ where ...

$$p = p_{\text{empty}} = p_{\text{observed}} + a(n/V_{\text{container}})^2$$

$$V = V_{\text{empty}} = V_{\text{container}} - b n$$

Combine. these two expressions into an equation relating p_{observed} , $V_{\text{container}}$, and T .

$$[p_{\text{observed}} + a(n/V_{\text{container}})^2](V_{\text{container}} - b n) = nRT$$

This is known as the **van der Waals equation**

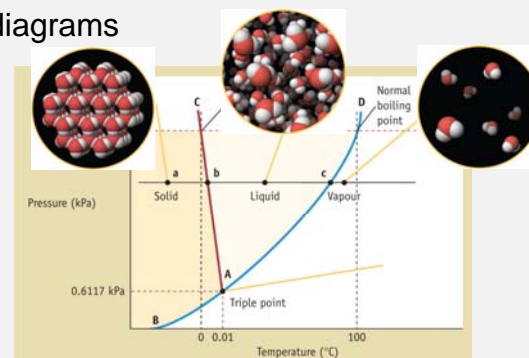


16

Lecture 9 CH102 A1 (MWF 9:05 am) Spring 2017

Copyright © 2017 Dan Dill dan@bu.edu

Phase diagrams



20

Lecture 9 CH102 A1 (MWF 9:05 am) Spring 2017

Copyright © 2017 Dan Dill dan@bu.edu

Phase diagrams

Lines of p versus T for which different phases are present **at the same time**.

That is, values of p and T for which different phases are **in equilibrium**.

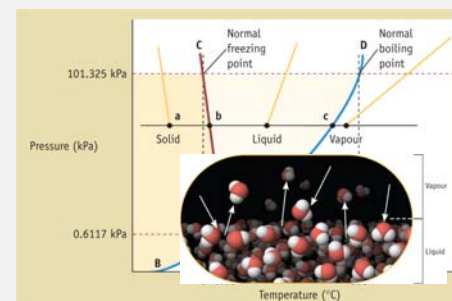


21

Lecture 9 CH102 A1 (MWF 9:05 am) Spring 2017

Copyright © 2017 Dan Dill dan@bu.edu

How about on blue line at 45 °C?

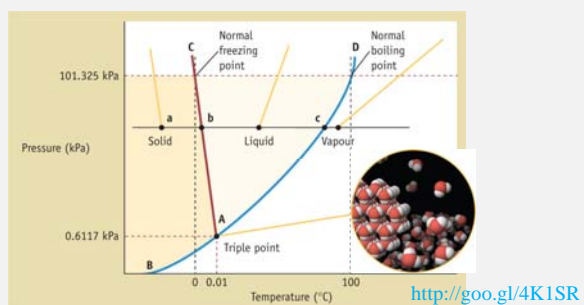


22

Lecture 9 CH102 A1 (MWF 9:05 am) Spring 2017

Copyright © 2017 Dan Dill dan@bu.edu

What about the intersection marked "A"



<http://goo.gl/4K1SR>



23

Lecture 9 CH102 A1 (MWF 9:05 am) Spring 2017

Copyright © 2017 Dan Dill dan@bu.edu

Triple point

Liquid tert-butyl alcohol, $C(CH_3)_3OH$ can boil and freeze at the same time...
<http://goo.gl/4K1SR>



24